

MBARARA MUNICIPAL SCHOOL

PRE-PRIMARY LEAVING EXAMINATIONS SET 1, TERM III, 2022

SOCIAL STUDIES WITH RELIGIOUS EDUCATION

Time Allowed: 2 hours 15 minutes

INDEX NO.

--	--	--	--	--	--	--	--	--	--

Candidate's Name Stream

Candidate's Signature Date

School of 1st Choice

Read the following instructions carefully:

The paper has two sections A and B

- Section A has 40 questions (40 marks)
- Section B has 15 questions (60 marks)
- Attempt ALL questions. All answers to both sections must be written in spaces provided.
- All answers must be written in blue or black ink only. Diagrams should be drawn in pen.
- Unnecessary alteration of work will lead to loss of marks.
- Any handwriting that cannot be easily read will lead to loss of marks.

FOR OFFICIAL USE ONLY.

SECTION	MARKS	T/L MARKS
A		
B		
TOTAL		
TEACHER'S COMMENTS		

Section A

1. Name the symbol on a map used to calculate distance between two places.

2. What is the major economic activity carried out around lake Albert in Uganda?

3. Why is the government of Uganda encouraging women to form SACCOS?

4. Name the major line of longitude marked 0° degrees.

5. Why is a radio an effective means of communicating to people in rural areas?

6. State one-way East African countries will benefit from DRC after joining the East African Community.

7. Give a reason why it is important to have laws in the community.

8. What makes Dr. Julius Kambarage Nyerere popular in East Africa?

9. When is the road sign below placed on the road?



10. How did the Indian Coolies contribute to the end of Slave trade in East Africa?

11. Write L.D.U. full.

12. In which climatic region are Oases common?

13. Give any one reason why old kingdoms had strong armies.

14. State one way a school can promote good relationship with her neighborhood.

15. Why is Swamp drainage regarded as a bad practice?

16. Mention one way a health Centre can improve the welfare of people in the community.


17. Give a reason why Nelson Mandela was against apartheid rule in South Africa.

before travel

what lesson can you learn from

18. What is the major plantation crop grown in Kalangala district in Uganda?

19. What type of house is shown below?



20. Give a reason to support your answer.

21. What makes Ethiopia popular in relation to African Union?

22. How has Entebbe International airport contributed to the economic development of Uganda?

23. What title is given to the Officer at the district responsible for supervising civil servants?

24. Mention any one danger of **floods** to the community.

25. How did Alexander Mackay's printing press promote the spread of Christianity in East Africa?

26. Mention the type of weather that may require a school child to carry the item below.



27. Name the trade that was conducted by the people of West Africa, North America and Europe across the Atlantic Ocean.

28. Give a reason why the Germans faced a lot of resistance in Tanganyika.

29. How did the Luo people contribute to the collapse of Bunyoro-Kitara Empire?

30. State any one way **Covid19** has affected the tourism industry in Uganda.

31. What is Immigration?

State one way a head teacher can promote security at school.

5. Apart from taxes, mention any other source of revenue to the districts in Uganda.

For questions 36 - 40, answer either Christianity or Islam but not both.

36. **Either:** Who led the Israelites to the Promised Land?

Or: Who led the Ban-Israelites to the Promised Land?

Either: Give **one** symbol of the Holy Spirit on the day of Pentecost.

Or: Give **one** symbol of Islam.

Either: Mention any **one** way Christians benefit from attending church services (mass).

Or: Mention any **one** way Muslims benefit from attending regular prayers.

37. **Either:** Name any **one** way Jesus bridged the gap between God and mankind.

Or: Name any **one**-way Prophet Muhammad perfected Islam.

40. **Either:** Write down any one thing that Christians observe during Lent period.

Or: Write down any **one** thing Muslims observe during Saum.

SECTION B (60 MARKS)

41. a) What are Social activities?

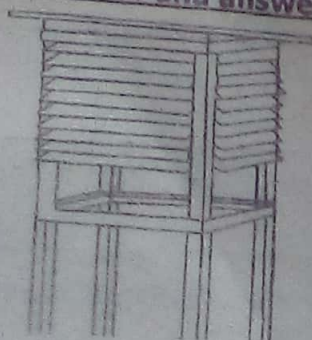
b) Give any two examples of social activities carried out in our communities.

i) _____

ii) _____

c) How do social activities unite people?

42. **Study the diagram below and answer the questions that follow:**



a) Name the feature shown in the diagram above.

b) Write down any two weather instruments kept in the above feature.

i) _____

ii) _____

c) Why is the feature shown above painted white?

43. Complete the table below correctly:

Service provider	Service centre
Midwife
.....	Cares for our teeth
Barber
.....	Mends our shoes.

44. a) What makes **Vasco da Gama** popular in Africa?

b) Mention any two positive results of the Portuguese rule in East Africa.

i) _____

ii) _____

c) Why did the Portuguese develop conflicts with the Arabs at the East African coast?

45. a) Name the last Bantu tribe to enter East Africa.

b) Give any two reasons why the Bantu settled along river valleys in East Africa.

i) _____

ii) _____

c) State one way the Bantu influenced the life of the Plain Nilotes in East Africa.

46. a) Name the group of people who founded Bunyoro-Kitara Empire.

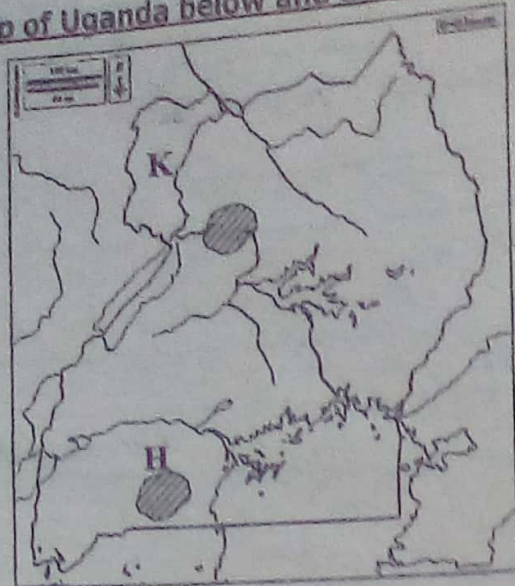
b) Write down any **two** activities that the Chwezi are remembered for in Uganda.

i) _____

ii) _____

c) Mention the last dynasty that ruled Bunyoro-Kitara Empire.

47. Study the map of Uganda below and answer the questions that follow.




- Name the National park marked **H**.

- Use letter **M** to show Kidepo Valley National Game Park.
- Name the major ethnic group in region marked **K**.

- Give **one** reason why animals are found in different vegetation zones.

48. Study the diagram below and answer the questions that follow:



- Name the part marked **R**.

 - Which organ of government is represented by the diagram above?

 - Write down any **two** importance of the organ you have named in (b) above.
 - _____
 - _____
49. a) Give any **two** reasons why the government carries out a population census.
- _____
 - _____
- b) Why is a population census carried out after 10 years?

c) Mention any one problem **enumerators** face when carrying out population Census.

50. a) In which country did the Berlin conference of 1884-5 take place?

b) What role did Chancellor Otto Von Bismarck play in the colonization of Africa?

c) State any two ways the Berlin conference affected Africa.

i) _____

ii) _____

For questions 51 – 55, answer either Christianity or Islam but not both

51. **Either:**

a) Mention any **two** gospel books in the Bible.

i) _____

ii) _____

b) Write down any **two** ways Christians benefit from reading the Bible.

i) _____

ii) _____

Or:

a) Mention the books that were received by the following prophets:

i) Dauda _____

ii) Musa _____

b) Write down any **two** ways Muslims benefit from reading the Qur'an.

i) _____

ii) _____

52. **Either:**

a) Mention any two Christian values.

i) _____

ii) _____

b) State any two ways some Christians have failed to live to God's expectations.

i) _____

ii) _____

Or:

a) State any two Muslim values.

i) _____

ii) _____

b) State any two ways some Muslim have failed to live to Allah's expectations.

i) _____

ii) _____

53. Either:

a) Write down the place where sinners will go on the day of Judgement.

- b) Write down any **two** things that will cause people to go to the place mentioned in (a) above.
- i) _____
- ii) _____
- c) Give any **one** way a Christian can avoid going to the place mentioned in (a) above.
- _____

Or:

a) Write down the place where sinners will go on the Day of Judgement.

- b) Write down any **two** things that will cause people to go to the place mentioned in (a) above.
- i) _____
- ii) _____
- c) What role will be played by Angel Israfeel on the Day of Judgement?
- _____

54. Either:

a) What is marriage?

b) Give any two factors to consider when choosing a marriage partner.

- i) _____
- ii) _____
- c) Mention one reason why some marriages have failed.
- _____

Or:

a) What Nikkah?

b) Mention any **two** factors to consider when choosing a marriage partner.

- i) _____
- ii) _____
- c) Mention one reason why some marriages have failed.
- _____

55. Either:

a) What prayer did Jesus Christ teach his disciples?

b) Give a reason why Christians need to pray

- i) before meals _____
- ii) before travelling _____
- c) What lesson can you learn from Jesus' prayerful life?
- _____

Or:

a) What prayer do Muslims perform at Night during the month of Ramadhan?

b) Give a reason why Muslims need to pray,

- i) before meals _____
- ii) before travelling _____
- c) What lesson can you learn from Prophet Muhammad's prayerful life?
- _____